

Environmental Science Exam 2 Choose 6 of the 9 Biomes we studied and list 2 characteristics, 2 animals, & 2 plants for each biome.

1. Biome _____

Characteristic _____, _____

Animals _____, _____

Plants _____, _____

2. Biome _____

Characteristic _____, _____

Animals _____, _____

Plants _____, _____

3. Biome _____

Characteristic _____, _____

Animals _____, _____

Plants _____, _____

4. Biome _____

Characteristic _____, _____

Animals _____, _____

Plants _____, _____

5. Biome _____

Characteristic _____,

Animals _____,

Plants _____,

6. Biome _____

Characteristic _____,

Animals _____,

Plants _____,

List 3 environmental problems & explain a solution for each.

7. Problem _____

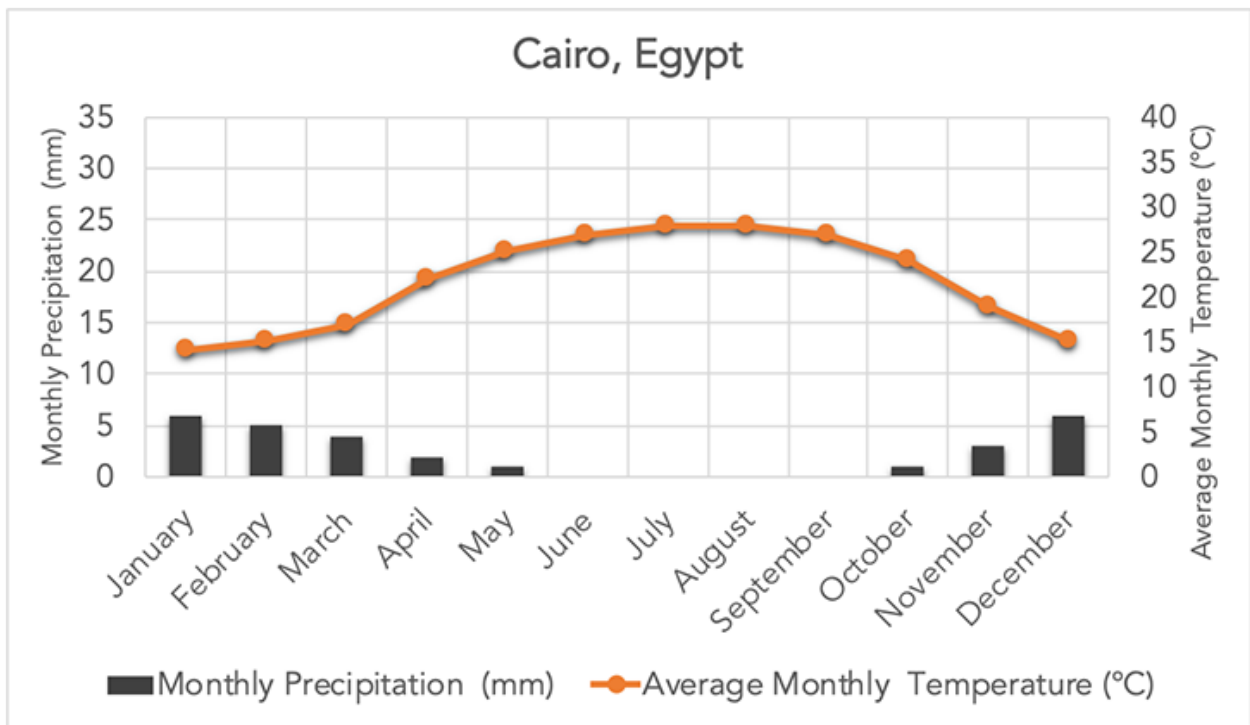
Solution _____

8. Problem _____

Solution _____

9. Problem _____

Solution _____

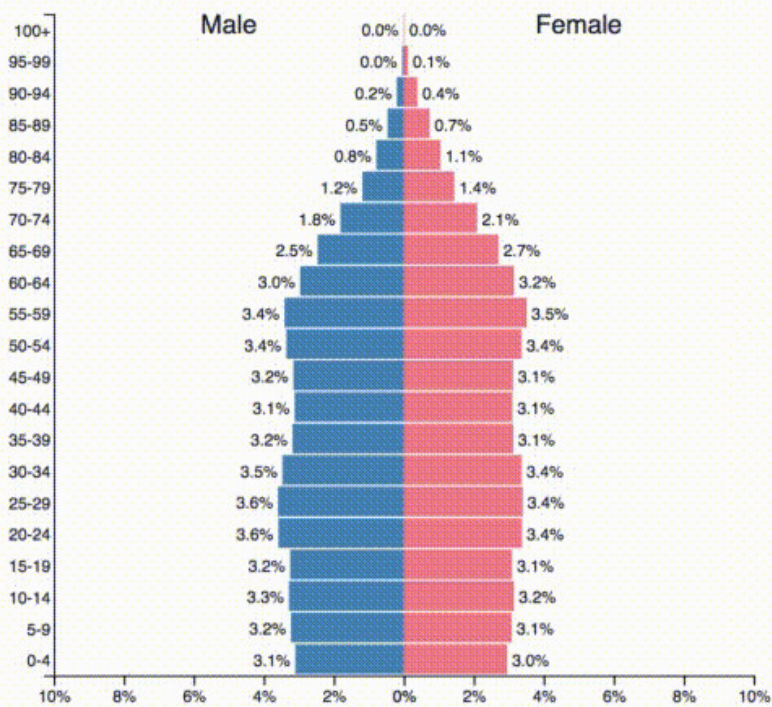


10. Using the climate graph above for Cairo Egypt. How much precipitation occurs in July? Be sure to label the amount.

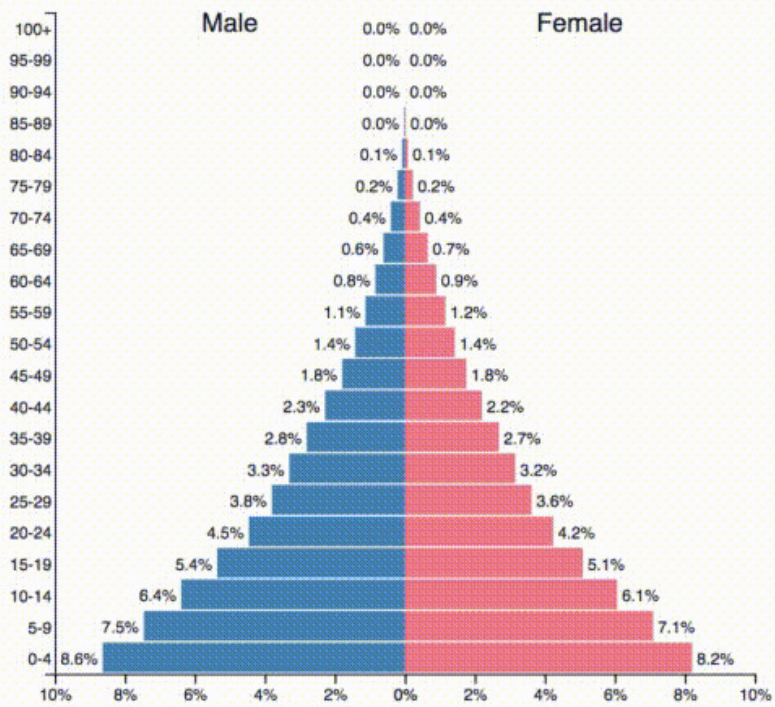
11. What is the coldest month? Also, list the temperature of that month and include the label.

Month _____ Temperature _____

12. Using the population growth chart below, Explain why Nigeria have a much bigger population problem than the US even if the US has many more people?



United States of America - 2017
Population: 326,474,013



Nigeria - 2017
Population: 191,835,936